











Roll them & Add them!



1   $\boxed{1} + \boxed{3} = \boxed{4}$



2   $\boxed{} + \boxed{} = \boxed{}$



3   $\boxed{} + \boxed{} = \boxed{}$

4   $\boxed{} + \boxed{} = \boxed{}$

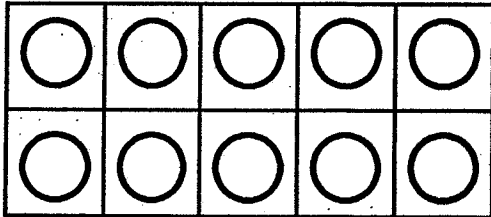
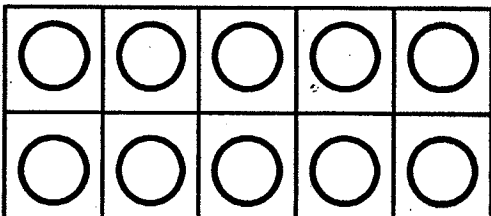
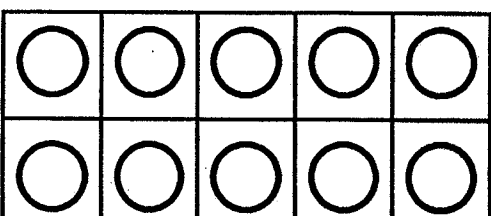
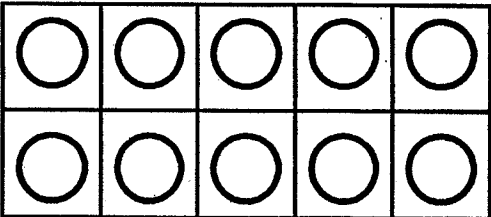
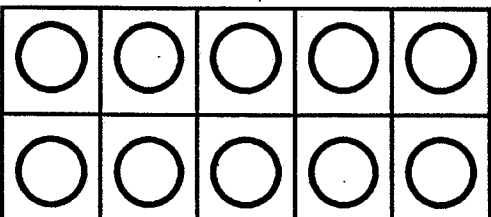
5   $\boxed{} + \boxed{} = \boxed{}$

6   $\boxed{} + \boxed{} = \boxed{}$

7   $\boxed{} + \boxed{} = \boxed{}$

8   $\boxed{} + \boxed{} = \boxed{}$

Making Tens Dice Roll

| Dice Roll Number | The Number I Need to Make 10 | Equation | Tens Frame (use 2 colors) |
|------------------|------------------------------|----------|---|
| | | |  |
| | | |  |
| | | |  |
| | | |  |
| | | |  |

**Build 10.
Add 1 more.
What is the
sum?**



Dominino Addition

| | |
|--|--|
| | |
|--|--|

$$\underline{\quad} + \underline{\quad} = \underline{\quad}$$

| | |
|--|--|
| | |
|--|--|

$$\underline{\quad} + \underline{\quad} = \underline{\quad}$$

| | |
|--|--|
| | |
|--|--|

$$\underline{\quad} + \underline{\quad} = \underline{\quad}$$

| | |
|--|--|
| | |
|--|--|

$$\underline{\quad} + \underline{\quad} = \underline{\quad}$$

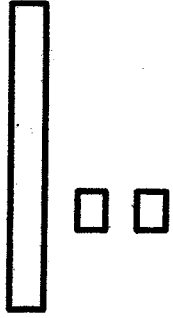
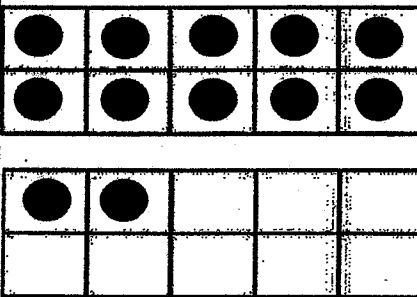



| | |
|--|--|
| | |
|--|--|

$$\underline{\quad} + \underline{\quad} = \underline{\quad}$$

| | |
|--|--|
| | |
|--|--|

$$\underline{\quad} + \underline{\quad} = \underline{\quad}$$

Write, Make, Expand, Base 10!

| Write | Make | Expand | Base 10 |
|---|---|--|---|
| <div style="border: 2px solid black; border-radius: 15px; padding: 20px; text-align: center; font-size: 2em; font-weight: bold;">12</div> |  | $\begin{array}{r} \underline{1} \text{ tens} \\ \underline{2} \text{ ones} \\ 10 + 2 = 12 \end{array}$ |  |
| <div style="border: 2px solid black; border-radius: 15px; height: 150px; width: 100%;"></div> | | $\begin{array}{r} \underline{\quad} \text{ tens} \\ \underline{\quad} \text{ ones} \\ \underline{\quad} + \underline{\quad} = \underline{\quad} \end{array}$ |  |
| <div style="border: 2px solid black; border-radius: 15px; height: 150px; width: 100%;"></div> | | $\begin{array}{r} \underline{\quad} \text{ tens} \\ \underline{\quad} \text{ ones} \\ \underline{\quad} + \underline{\quad} = \underline{\quad} \end{array}$ |  |
| <div style="border: 2px solid black; border-radius: 15px; height: 150px; width: 100%;"></div> | | $\begin{array}{r} \underline{\quad} \text{ tens} \\ \underline{\quad} \text{ ones} \\ \underline{\quad} + \underline{\quad} = \underline{\quad} \end{array}$ |  |

Name _____ DATE _____

I can write to **120!**

10

20

30

40

50

60

70

80

90

100

110



120

Beat You to 10!

Player 1 _____

Player 2 _____

| |
|--|
| |
| |
| |
| |
| |
| |
| |
| |
| |
| |
| |



| |
|--|
| |
| |
| |
| |
| |
| |
| |
| |
| |
| |
| |

1 2 3 4 5 6 7 8 9 10

14

13


11

12

16

19


16



17



15



12

13

11

19

17

18

14

